

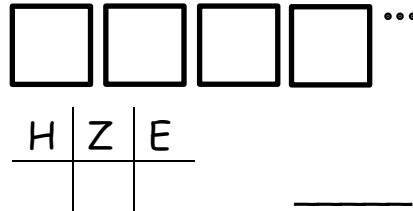
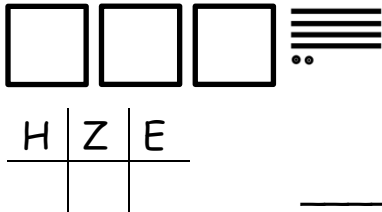
Zahlen darstellen im ZR 1000

Das kann ich schon!

Name: _____


Datum: _____

① Schreibe die Zahlen.




② Zeichne die Zahlbilder.

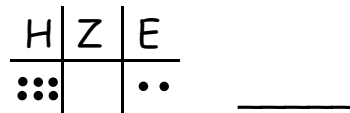
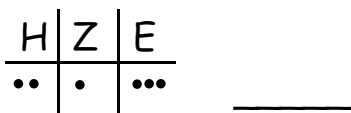
426



509



③ Wie heißt die Zahl?



④ Zerlege in Hunderter, Zehner und Einer.

$$238 = \underline{\quad} + \underline{\quad} + \underline{\quad}$$

$$635 = \underline{\quad} + \underline{\quad} + \underline{\quad}$$



⑤ Notiere die Zahl. Schau genau!

5 H	3 Z	8 E	_____	3 H	9 E	_____	46 E	_____
9 H	6 E	4 Z	_____	4 Z	6 H	_____	83 Z	_____
4 H	2 Z	6 E	_____	8 H	10 Z	_____	57 Z	_____

