



# Addition verstehen


Zahlraum bis 20

Name: \_\_\_\_\_

Datum: \_\_\_\_\_


① Höre. Rechne. Male.

Anna hat 7 Bälle.  
Tom hat 5 Bälle mehr.  
Wie viele Bälle haben  
sie zusammen?



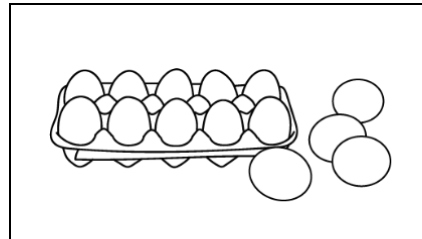
② Rechne.

a)




$$\underline{\quad} + \underline{\quad} = \underline{\quad}$$

b)




$$\underline{\quad} + \underline{\quad} = \underline{\quad}$$



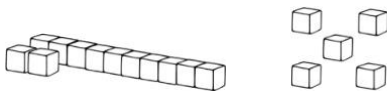
③ Rechne.




$$\underline{\quad} + \underline{\quad} + \underline{\quad} = \underline{\quad}$$




$$\underline{\quad} + \underline{\quad} = \underline{\quad}$$



$$\underline{\quad} + \underline{\quad} = \underline{\quad}$$



$$\underline{\quad} + \underline{\quad} + \underline{\quad} = \underline{\quad}$$



④ Male ein Bild zu der Plusaufgabe.

a)



$$6 + 5 = \underline{\quad}$$

b)



$$7 + 4 = \underline{\quad}$$

