



Subtraktion verstehen

Zahlraum bis 10

Name: _____

Datum: _____

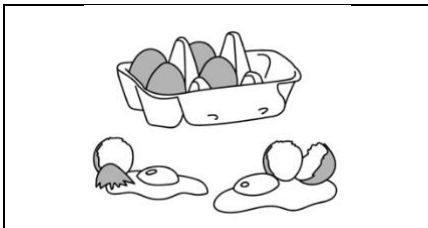
① Höre. Rechne. Male.

Anna hat 6 Bälle.
Tom hat 4 Bälle.
Wie viele Bälle hat Anna
mehr als Tom?



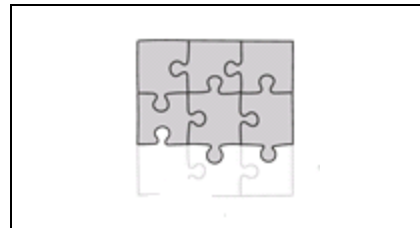
② Rechne.

a)



$$\underline{\quad} - \underline{\quad} = \underline{\quad}$$

b)

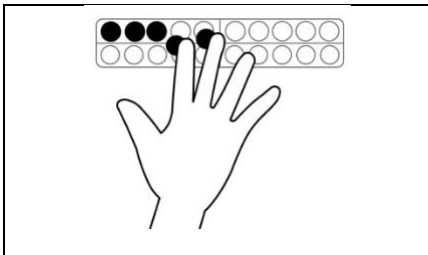


$$\underline{\quad} + \underline{\quad} = \underline{\quad}$$




③ Rechne.

a)



$$\underline{\quad} - \underline{\quad} = \underline{\quad}$$

b)




$$\underline{\quad} - \underline{\quad} = \underline{\quad}$$




④ Male ein Bild zu der Minusaufgabe.

a)



$$4 - 2 = \underline{\quad}$$

b)



$$8 - 3 = \underline{\quad}$$

