



Addition verstehen

Zahlraum bis 10

Name: _____

Datum: _____


① Höre. Rechne. Male.

Anna hat 3 Bälle.
Tom hat 2 Bälle mehr.
Wie viele Bälle haben
sie zusammen?




② Rechne.

a)



$$\underline{\quad} + \underline{\quad} = \underline{\quad}$$

b)




$$\underline{\quad} + \underline{\quad} = \underline{\quad}$$



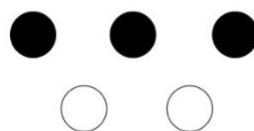
③ Rechne.

a)



$$\underline{\quad} + \underline{\quad} = \underline{\quad}$$

b)



$$\underline{\quad} + \underline{\quad} = \underline{\quad}$$

c)




$$\underline{\quad} + \underline{\quad} = \underline{\quad}$$




④ Male ein Bild zu der Plusaufgabe.

a)



$$3 + 3 = \underline{\quad}$$

b)



$$3 + 4 = \underline{\quad}$$

