

FÖRDERUNG  
DIAGNOSE  
MATHEMATIK

Name: \_\_\_\_\_

Klasse: \_\_\_\_\_

Datum: \_\_\_\_\_

Wie geht es weiter? Schreibe auf.

15   16   17   \_\_\_\_\_

85   86   87   \_\_\_\_\_

Zähle rückwärts. Wie geht es weiter?

23   22   21   \_\_\_\_\_

Schreibe die Zahlen auf.

\_\_\_\_\_

\_\_\_\_\_


\_\_\_\_\_

\_\_\_\_\_

\_\_\_\_\_

\_\_\_\_\_

Was passt zum Bild? Kreuze an.




	Z	E
	5	4

	Z	E
	4	5


	Z	E
	5	5

Trage Zehner und Einer ein.



Z	E

Zeichne 21 Plättchen so, dass man schnell erkennen kann, wie viele es sind.



Welche Zahl hast du gesehen? Schreibe sie auf.

\_\_\_\_\_


\_\_\_\_\_

\_\_\_\_\_


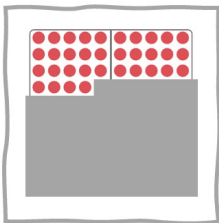
\_\_\_\_\_

\_\_\_\_\_


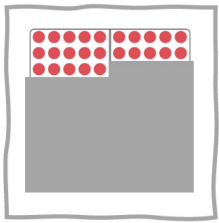
Welche Bilder passen zusammen? Verbinde.





25



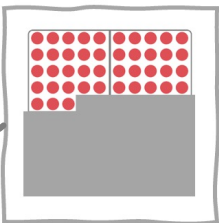
43



40

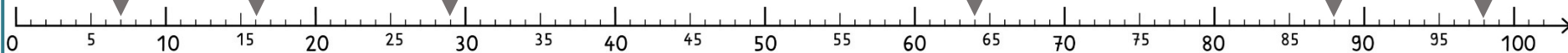


34



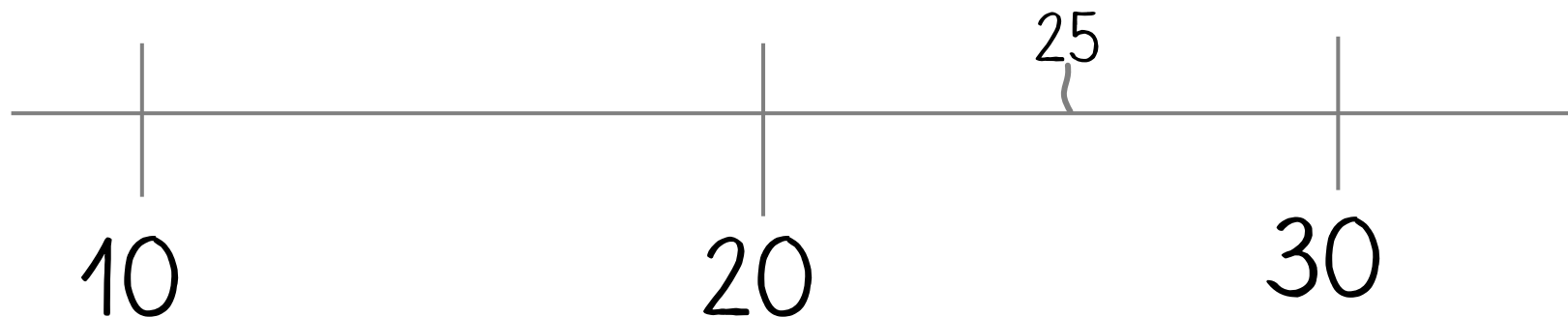
Welche Zahlen stehen an diesen Stellen? Trage ein.

7

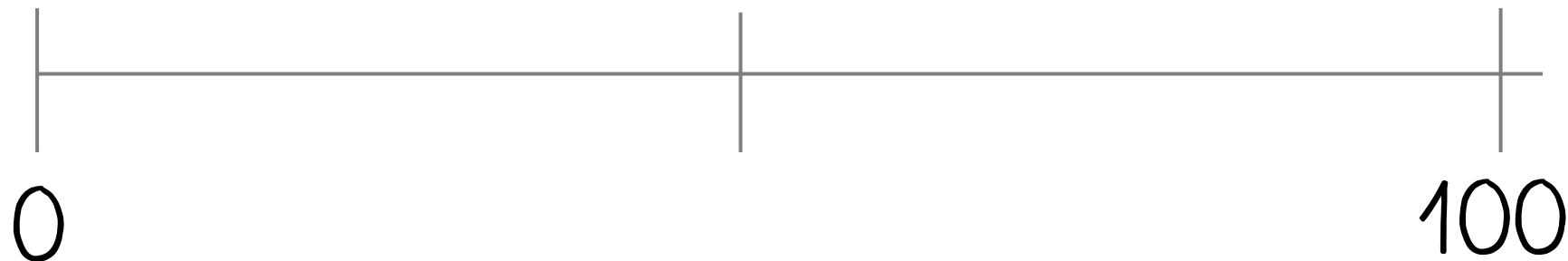





Trage die Zahlen am Rechenstrich ein: ~~25~~, 9, 15, 21, 29




Trage die Zahlen am Rechenstrich ein: 50, 75, 90, 49, 25




Wie viel fehlt bis zur 100?



$$47 + \underline{53} = 100$$



$$50 + \underline{\quad} = 100$$



$$89 + \underline{\quad} = 100$$

$$75 + \underline{\quad} = 100$$

$$57 + \underline{\quad} = 100$$

\*Finde viele Aufgaben mit dem Ergebnis 20.