


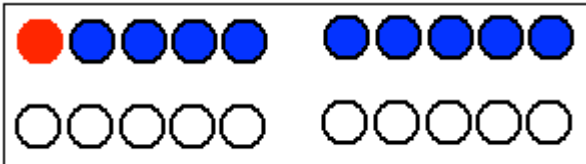
Name: \_\_\_\_\_

Datum: \_\_\_\_\_

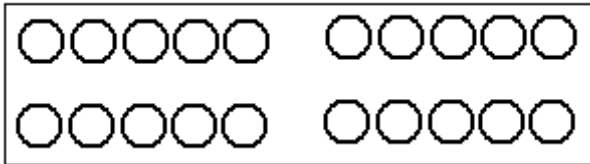


## Wie treffen wir die 10?

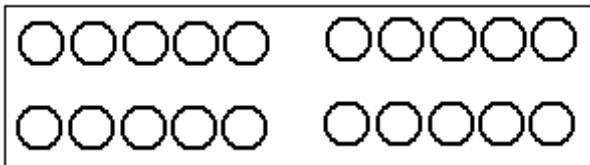
Finde möglichst schlaue Additionsaufgaben mit der **Summe 10**.  
Lege deine Aufgaben mit Plättchen am Zwanzigerfeld.



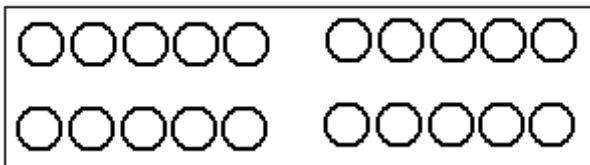
$$\underline{\quad} + \underline{\quad} = 10$$



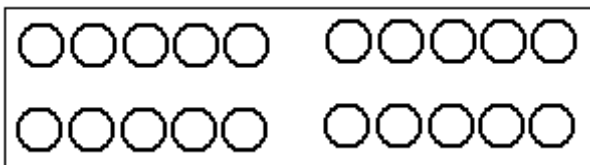
$$\underline{\quad} + \underline{\quad} = 10$$



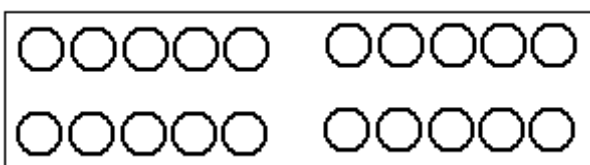
$$\underline{\quad} + \underline{\quad} = 10$$



$$\underline{\quad} + \underline{\quad} = 10$$



$$\underline{\quad} + \underline{\quad} = 10$$



$$\underline{\quad} + \underline{\quad} = 10$$

