
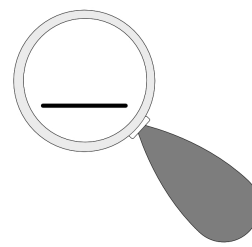
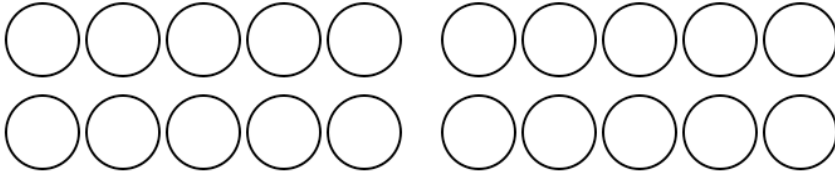


Zahlen unter der Lupe bis 20



Name: _____

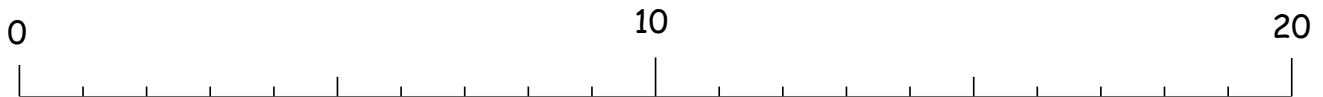
1) Male so viele Punkte aus.




2) Trage in die Stellenwerttafel ein.

Zehner	Einer

3) Zeige am Zahlenstrahl

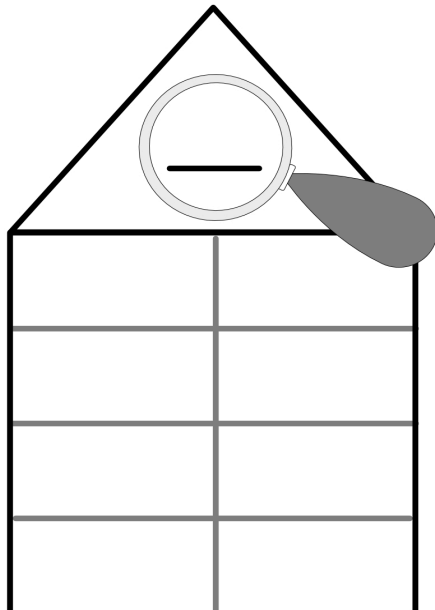


4) Lege mit Geld.



5) Male ein Zahlenbild.

6) Zerlege die Zahl.



7) Schreibe Rechenaufgaben.

