
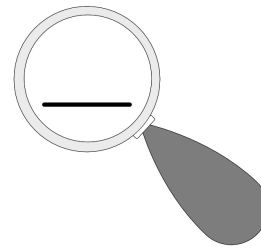



Zahlen unter der Lupe bis 10

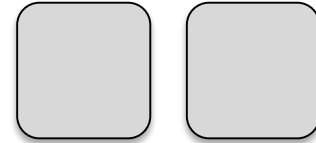


Name: _____

1) Male so viele Punkte aus.




2) Zeichne ein Würfelbild.



3) Zeige am Zahlenstrahl.

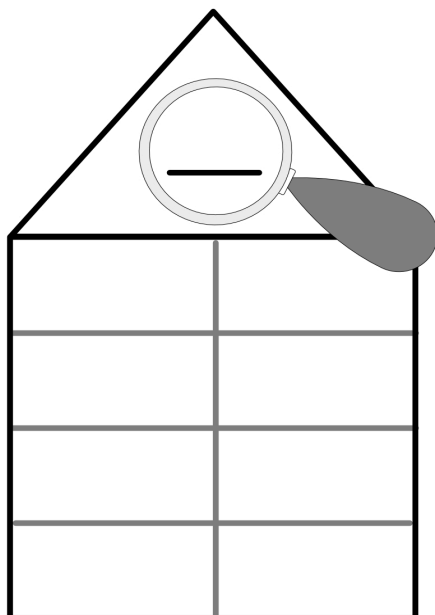


4) Lege mit Geld.



5) Male ein Zahlenbild.

6) Zerlege die Zahl.



7) Schreibe Rechenaufgaben.

