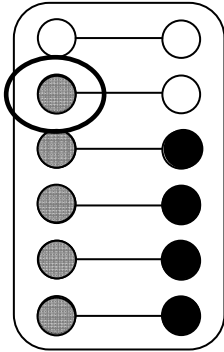




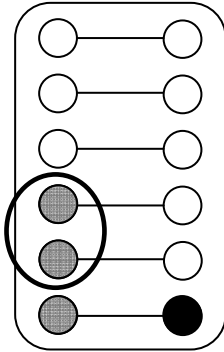
# Hamstern 1

Milo Lia



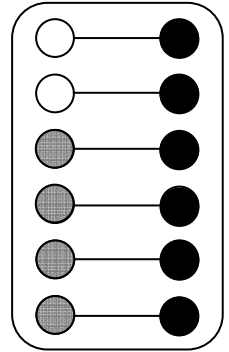
Milo hat 1 mehr.

Milo Lia



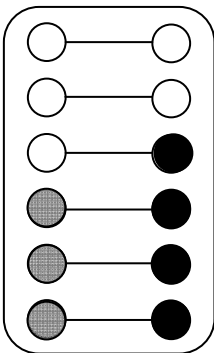
Milo hat    mehr.

Milo Lia



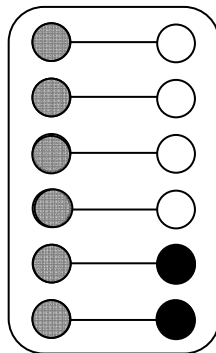
Lia hat    mehr.

Milo Lia



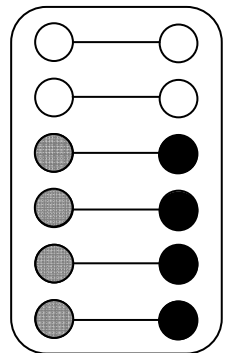
   hat    mehr.

Milo Lia



   hat    mehr.

Milo Lia

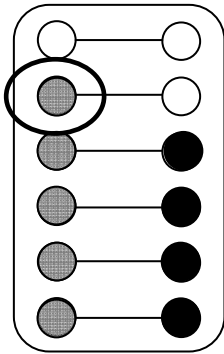


   hat    mehr.



# Hamstern 1\*

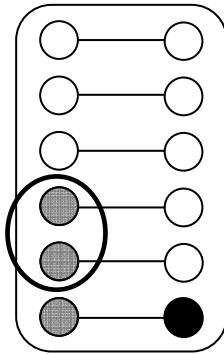
Milo Lia



Milo hat 1 mehr.

Lia hat 1 weniger.

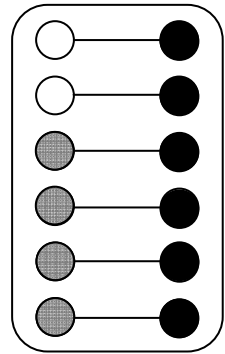
Milo Lia



Milo hat    mehr.

Lia hat    weniger.

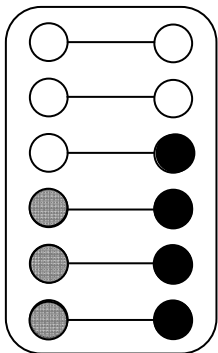
Milo Lia



Lia hat    mehr.

Milo hat    weniger.

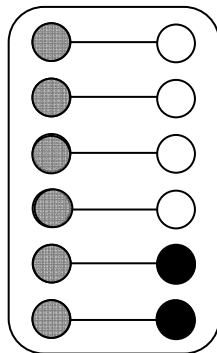
Milo Lia



   hat    mehr.

   hat    weniger.

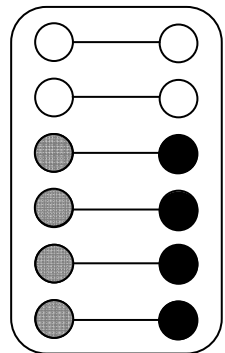
Milo Lia



   hat    mehr.

   hat    weniger.

Milo Lia



   hat    mehr.


   hat    weniger.



# Hamstern 2

Zeichne die Plättchen.

Trage ein, wie viele Plättchen das Kind mehr hat.



Milo Lia



<input type="checkbox"/>	<input type="checkbox"/>
<input type="checkbox"/>	<input type="checkbox"/>
<input type="checkbox"/>	<input type="checkbox"/>
<input type="checkbox"/>	<input type="checkbox"/>
<input type="checkbox"/>	<input type="checkbox"/>
<input type="checkbox"/>	<input type="checkbox"/>

Lia hat      mehr.

Milo Lia



<input type="checkbox"/>	<input type="checkbox"/>
<input type="checkbox"/>	<input type="checkbox"/>
<input type="checkbox"/>	<input type="checkbox"/>
<input type="checkbox"/>	<input type="checkbox"/>
<input type="checkbox"/>	<input type="checkbox"/>
<input type="checkbox"/>	<input type="checkbox"/>

Milo hat      mehr.

Milo Lia



<input type="checkbox"/>	<input type="checkbox"/>
<input type="checkbox"/>	<input type="checkbox"/>
<input type="checkbox"/>	<input type="checkbox"/>
<input type="checkbox"/>	<input type="checkbox"/>
<input type="checkbox"/>	<input type="checkbox"/>
<input type="checkbox"/>	<input type="checkbox"/>

Lia hat      mehr.

Milo Lia



<input type="checkbox"/>	<input type="checkbox"/>
<input type="checkbox"/>	<input type="checkbox"/>
<input type="checkbox"/>	<input type="checkbox"/>
<input type="checkbox"/>	<input type="checkbox"/>
<input type="checkbox"/>	<input type="checkbox"/>
<input type="checkbox"/>	<input type="checkbox"/>

     hat      mehr.

Milo Lia



<input type="checkbox"/>	<input type="checkbox"/>
<input type="checkbox"/>	<input type="checkbox"/>
<input type="checkbox"/>	<input type="checkbox"/>
<input type="checkbox"/>	<input type="checkbox"/>
<input type="checkbox"/>	<input type="checkbox"/>
<input type="checkbox"/>	<input type="checkbox"/>

     hat      mehr.

Milo Lia



<input type="checkbox"/>	<input type="checkbox"/>
<input type="checkbox"/>	<input type="checkbox"/>
<input type="checkbox"/>	<input type="checkbox"/>
<input type="checkbox"/>	<input type="checkbox"/>
<input type="checkbox"/>	<input type="checkbox"/>
<input type="checkbox"/>	<input type="checkbox"/>


     hat      mehr.



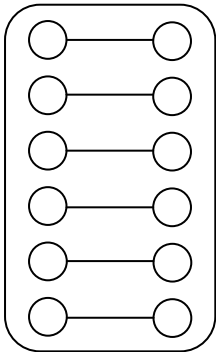
# Hamstern 2\*

Zeichne die Plättchen.

Trage ein, wie viele Plättchen die Kinder mehr oder weniger haben.



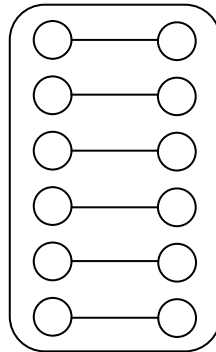
Milo Lia



Lia hat      mehr.

Milo hat      weniger.

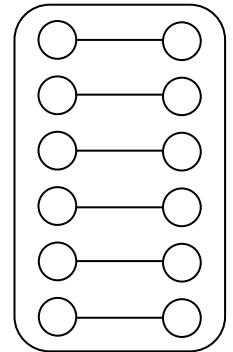
Milo Lia



Milo hat      mehr.

Lia hat      weniger.

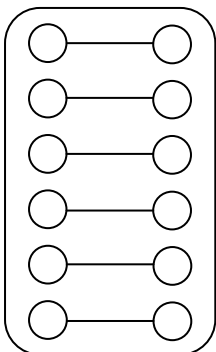
Milo Lia



Lia hat      mehr.

Milo hat      weniger.

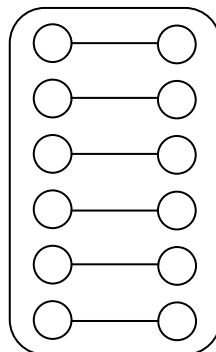
Milo Lia



     hat      mehr.

     hat      weniger.

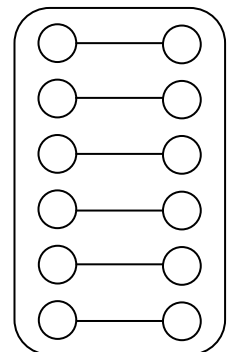
Milo Lia



     hat      mehr.

     hat      weniger.

Milo Lia




     hat      mehr.

     hat      weniger.

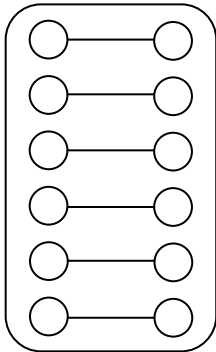


# Hamstern 3



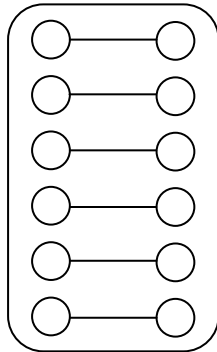
Zeichne das Würfelbild und die Plättchen.  
Trage ein, wie viele Plättchen das Kind mehr hat.

Milo Lia



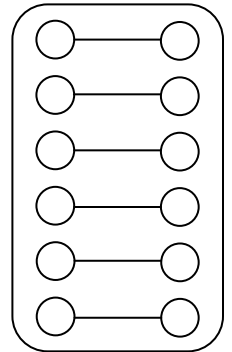
Lia hat 1 mehr.

Milo Lia



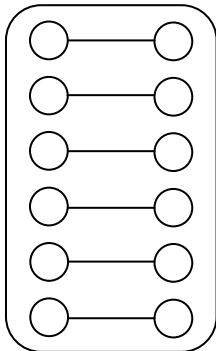
Lia hat 3 mehr.

Milo Lia



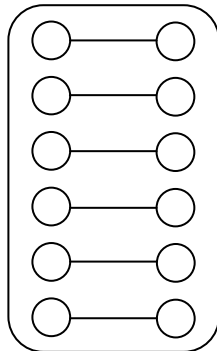
Milo hat 2 mehr.

Milo Lia



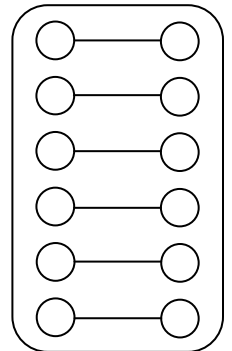
Milo hat      mehr.

Milo Lia



Lia hat      mehr.


Milo Lia



     hat      mehr.



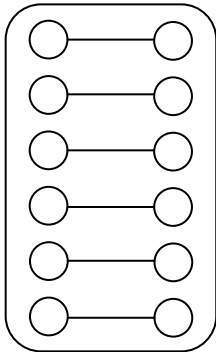
# Hamstern 3\*



Zeichne das Würfelbild und die Plättchen.

Trage ein, wie viele Plättchen die Kinder mehr oder weniger haben.

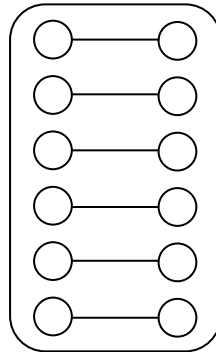
Milo Lia



Lia hat 1 mehr.

Milo hat 1 weniger.

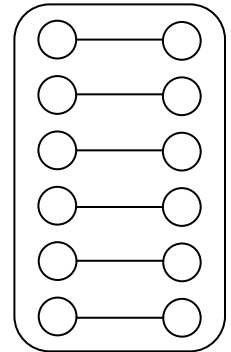
Milo Lia



Lia hat 3 mehr.

Milo hat 3 weniger.

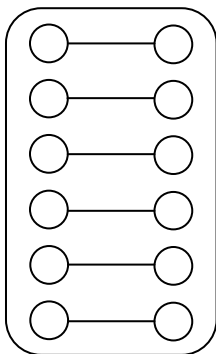
Milo Lia



Milo hat 2 mehr.

Lia hat 2 weniger.

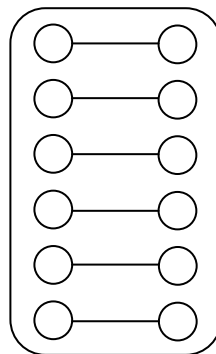
Milo Lia



Milo hat      mehr.

Lia hat      weniger.

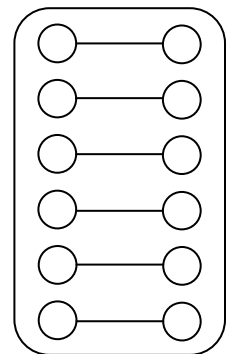
Milo Lia



Lia hat      mehr.

Milo hat      weniger.

Milo Lia



     hat      mehr.

     hat      weniger.