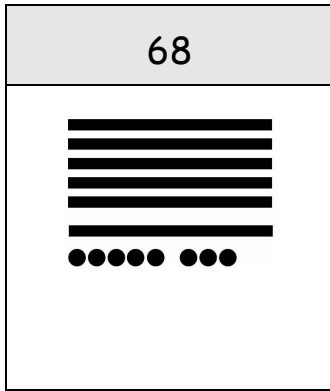


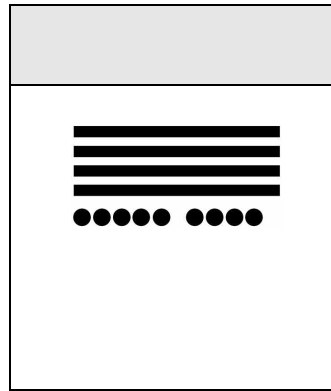


Zahlen darstellen



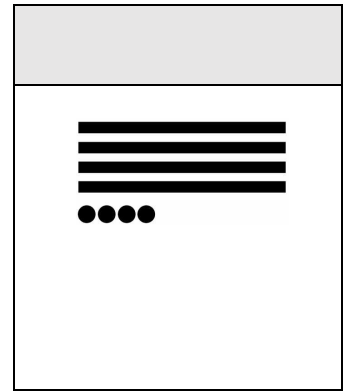
Z	E

_____ + _____ = _____



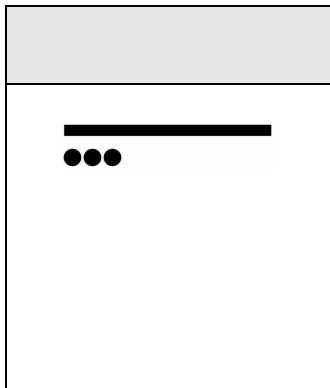
Z	E

_____ + _____ = _____




Z	E

_____ + _____ = _____




Z	E

_____ + _____ = _____




Z	E

_____ + _____ = _____




Z	E

_____ + _____ = _____




Z	E

_____ + _____ = _____



Z	E

_____ + _____ = _____



Z	E

_____ + _____ = _____



Zahlen darstellen

Z	E
3	2

_____ + _____ = _____

Z	E
5	4

_____ + _____ = _____

Z	E
7	2

_____ + _____ = _____

Z	E
1	3

_____ + _____ = _____

Z	E
3	1

_____ + _____ = _____

Z	E
4	8

_____ + _____ = _____

Z	E
6	0

_____ + _____ = _____

Z	E
2	7

_____ + _____ = _____

Z	E
7	2

_____ + _____ = _____



Zahlen darstellen

Z	E

_____ + _____ = _____

Z	E

_____ + _____ = _____

Z	E

_____ + _____ = _____

Z	E

_____ + _____ = _____

Z	E

_____ + _____ = _____

Z	E

_____ + _____ = _____

Z	E

_____ + _____ = _____

Z	E

_____ + _____ = _____

Z	E

_____ + _____ = _____