




# Operationsverständnis Subtraktion

Das kann ich schon!


Name: \_\_\_\_\_

Datum: \_\_\_\_\_

① Rechne. Male.



$$\underline{\quad} - \underline{\quad} = \underline{\quad}$$



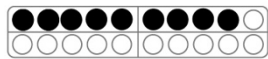
$$12 + \underline{\quad} = 16$$



$$11 - 5 = \underline{\quad}$$



② Rechne.



$$\underline{\quad} - \underline{\quad} = \underline{\quad}$$


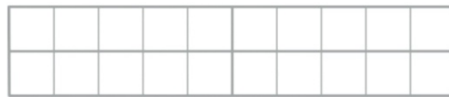


$$\underline{\quad} - \underline{\quad} = \underline{\quad}$$



③ Zerlege.

15	
5	
	9
7	
	15
6	



Anna hat 11 Autos. Tom hat 6 Autos. Wie viele Autos hat Anna mehr als Tom? Male oder rechne.

