

# Operationsverständnis Subtraktion


Das kann ich schon!

Name: \_\_\_\_\_

Datum: \_\_\_\_\_


## ① Rechne. Male.

a)




\_\_\_ - \_\_\_ = \_\_\_

b)




6 + \_\_\_ = 9

c)



7 - 4 = \_\_\_



## ② Rechne.

a)




\_\_\_ - \_\_\_ = \_\_\_

b)


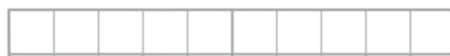


\_\_\_ - \_\_\_ = \_\_\_



## ③ Zerlege.

|   |   |
|---|---|
| 5 |   |
| 0 |   |
| 1 |   |
|   | 3 |
|   | 2 |
| 4 |   |
| 5 |   |



Anna hat 6 Autos. Tom hat 4 Autos. Wie viele Autos hat Anna mehr als Tom? Male oder rechne.

