


Zu Baustein N1 A, Aufgabe 2.2 und 2.3: Stellenwertquartett

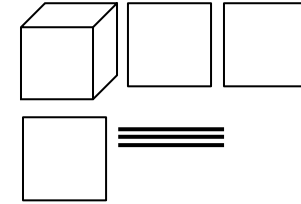
199	<table border="1"><thead><tr><th>T</th><th>H</th><th>Z</th><th>E</th></tr></thead><tbody><tr><td></td><td>1</td><td>9</td><td>9</td></tr></tbody></table>	T	H	Z	E		1	9	9	$100 + 90 + 9$	
T	H	Z	E								
	1	9	9								



1330

T	H	Z	E
1	3	3	0

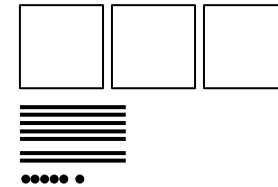
$$1000 + 300 + 30$$



376

T	H	Z	E
	3	7	6

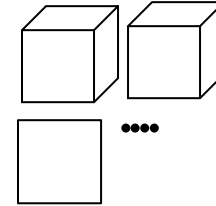
$$300 + 70 + 6$$



2104

T	H	Z	E
2	1	0	4

$$2000 + 100 + 4$$



158

T	H	Z	E
	1	5	8

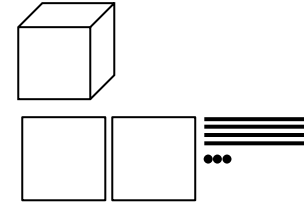
$$100 + 50 + 8$$



1243

T	H	Z	E
1	2	4	3


$$1000 + 200 + 40 + 3$$



218

T	H	Z	E
	2	1	8


$$200 + 10 + 8$$



404

T	H	Z	E
	4	0	4

$$400 + 4$$



--	--	--	--